




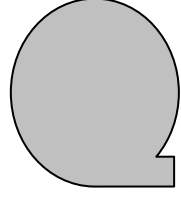



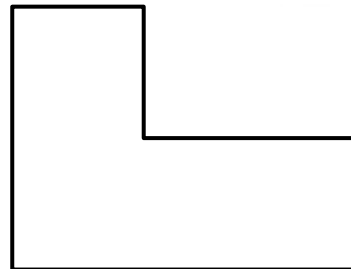



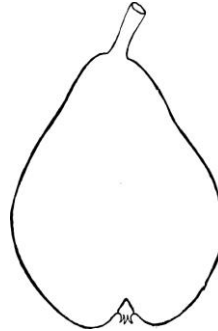
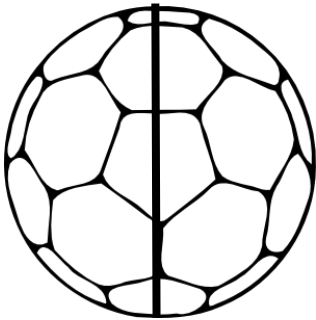


SİMETRİ

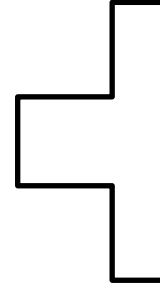




Aşağıdakilerden verilen şekillerden iki eş parçaya bölünebilenleri işaretleyiniz.




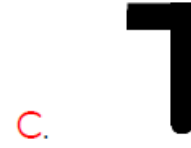
Aşağıdaki şekillerde iki eş parçaya bölünebilenlerin yarısını boyayın. İki eş parçaya bölünemeyen şekilleri sakın boyamayın.



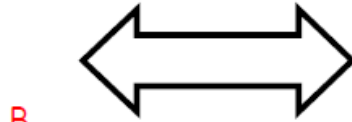
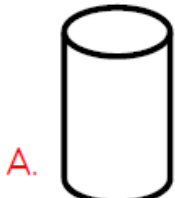
Yarısı çizilmiş şekilleri tamamlayın.




1.  Şeklinin **simetrisi** aşağıdakilerden hangisidir.



2. Aşağıdaki şekillerden hangisinin **simetrisi yoktur**?



3. Aşağıdaki hayvanlardan hangisinin **simetrisi oluşur**?



4. Aşağıdaki çiçeklerden **hangisinin simetrisi oluşur**?



BASİT-TÜREMİŞ-BİRLEŞİK SÖZCÜKLER BOYAMA ETKİNLİĞİ

(Basit—MAVİ) (Türemiş-YEŞİL) (Birleşik-Turuncu)

