

**3.SINIF TOPLAMA İŞLEMİ**  
**1.Aşağıdaki toplama işlemlerini yapınız.**

$$\begin{array}{r} 372 \\ +586 \\ \hline \end{array}$$

$$\begin{array}{r} 605 \\ + 90 \\ \hline \end{array}$$

$$\begin{array}{r} 616 \\ +349 \\ \hline \end{array}$$

$$\begin{array}{r} 829 \\ + 51 \\ \hline \end{array}$$

$$\begin{array}{r} 208 \\ +204 \\ \hline \end{array}$$

$$\begin{array}{r} 269 \\ +452 \\ \hline \end{array}$$

$$\begin{array}{r} 538 \\ +447 \\ \hline \end{array}$$

$$\begin{array}{r} 610 \\ +155 \\ \hline \end{array}$$

$$\begin{array}{r} 266 \\ +109 \\ \hline \end{array}$$

$$\begin{array}{r} 657 \\ +408 \\ \hline \end{array}$$

$$\begin{array}{r} 55 \\ + 18 \\ \hline \end{array}$$

$$\begin{array}{r} 77 \\ + 60 \\ \hline \end{array}$$

$$\begin{array}{r} 702 \\ + 95 \\ \hline \end{array}$$

$$\begin{array}{r} 478 \\ +341 \\ \hline \end{array}$$

$$\begin{array}{r} 151 \\ 15 \\ + 13 \\ \hline \end{array}$$

$$\begin{array}{r} 478 \\ 341 \\ + 80 \\ \hline \end{array}$$

$$\begin{array}{r} 702 \\ 95 \\ + 93 \\ \hline \end{array}$$

$$\begin{array}{r} 288 \\ 353 \\ 77 \\ + 60 \\ \hline \end{array}$$

$$\begin{array}{r} 155 \\ 122 \\ 479 \\ 18 \\ + 15 \\ \hline \end{array}$$

$$\begin{array}{r} 177 \\ 109 \\ 227 \\ 96 \\ + 53 \\ \hline \end{array}$$

$$\begin{array}{r} 190 \\ 186 \\ 266 \\ 15 \\ + 54 \\ \hline \end{array}$$

2.Verilen ilk işlemden başlayarak bulduğun toplamları ok ile gösterilen toplanan kısmına yaz ve en sonunda yıldızın değerini bul.

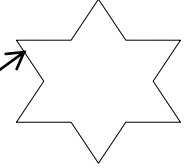
$$\begin{array}{r} 162 \\ + 28 \\ \hline \square \end{array}$$

$$\begin{array}{r} \square \\ + 43 \\ \hline \square \end{array}$$

$$\begin{array}{r} \square \\ +161 \\ \hline \square \end{array}$$

$$\begin{array}{r} \square \\ + 44 \\ \hline \square \end{array}$$

$$\begin{array}{r} \square \\ +330 \\ \hline \square \end{array}$$



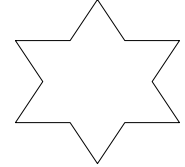
$$\begin{array}{r} 237 \\ + 28 \\ \hline \square \end{array}$$

$$\begin{array}{r} \square \\ +148 \\ \hline \square \end{array}$$

$$\begin{array}{r} \square \\ + 66 \\ \hline \square \end{array}$$

$$\begin{array}{r} \square \\ +196 \\ \hline \square \end{array}$$

$$\begin{array}{r} \square \\ +212 \\ \hline \square \end{array}$$



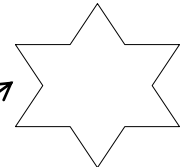
$$\begin{array}{r} 160 \\ +169 \\ \hline \square \end{array}$$

$$\begin{array}{r} \square \\ + 29 \\ \hline \square \end{array}$$

$$\begin{array}{r} \square \\ +189 \\ \hline \square \end{array}$$

$$\begin{array}{r} \square \\ + 77 \\ \hline \square \end{array}$$

$$\begin{array}{r} \square \\ +108 \\ \hline \square \end{array}$$



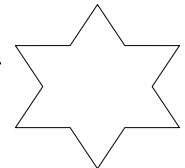
$$\begin{array}{r} 124 \\ +169 \\ \hline \square \end{array}$$

$$\begin{array}{r} \square \\ + 28 \\ \hline \square \end{array}$$

$$\begin{array}{r} \square \\ +167 \\ \hline \square \end{array}$$

$$\begin{array}{r} \square \\ + 330 \\ \hline \square \end{array}$$

$$\begin{array}{r} \square \\ +208 \\ \hline \square \end{array}$$



## TOPLAMA İŞLEMLERİNDE VERİLMEYEN SAYILARI BULALIM

Aşağıdaki toplama işlemlerinin basamaklarında verilmeyen rakamlarını belirleyiniz.

$$\begin{array}{r} 65\Box \\ +214 \\ \hline 867 \end{array}$$

$$\begin{array}{r} 341 \\ +2\Box7 \\ \hline 598 \end{array}$$

$$\begin{array}{r} 3\Box3 \\ +214 \\ \hline 597 \end{array}$$

$$\begin{array}{r} \Box26 \\ +403 \\ \hline 629 \end{array}$$

$$\begin{array}{r} 714 \\ +23\Box \\ \hline 949 \end{array}$$

$$\begin{array}{r} \Box3\Box \\ +241 \\ \hline 576 \end{array}$$

$$\begin{array}{r} 302 \\ +\Box4\Box \\ \hline 748 \end{array}$$

$$\begin{array}{r} 64\Box \\ +\Box23 \\ \hline 768 \end{array}$$

$$\begin{array}{r} \Box43 \\ +25\Box \\ \hline 999 \end{array}$$

$$\begin{array}{r} 21\Box \\ +4\Box2 \\ \hline 687 \end{array}$$

$$\begin{array}{r} 6\Box5 \\ +27\Box \\ \hline 893 \end{array}$$

$$\begin{array}{r} 34\Box \\ +\Box76 \\ \hline 925 \end{array}$$

$$\begin{array}{r} \Box57 \\ +16\Box \\ \hline 526 \end{array}$$

$$\begin{array}{r} 265 \\ +\Box7\Box \\ \hline 643 \end{array}$$

$$\begin{array}{r} \Box8\Box \\ +646 \\ \hline 935 \end{array}$$

$$\begin{array}{r} \Box51 \\ 5\Box2 \\ +14\Box \\ \hline 896 \end{array}$$

$$\begin{array}{r} 35\Box \\ 1\Box3 \\ +\Box02 \\ \hline 697 \end{array}$$

$$\begin{array}{r} 4\Box3 \\ 342 \\ +\Box3\Box \\ \hline 999 \end{array}$$

$$\begin{array}{r} 2\Box3 \\ 178 \\ +\Box4\Box \\ \hline 786 \end{array}$$

## YAZIMI YANLIŞ SÖZCÜKLER

Aşağıda yazımı yanlış verilmiş sözcüklerin doğru yazımını imla kılavuzundan bularak yazınız.

YANLIŞ	DOĞRU	YANLIŞ	DOĞRU
orjinal	orijinal	yanlız	
hiç bir		fiat	
bir kaç		fayiz	
bir çok		makina	
yada		matba	
herşey		zatüre	
hoşgeldin		deynek	
asvalt		süpriz	
çenber		poaça	
direk		eksoz	
eşki		komser	
espiri		kavonoz	
filim		parentez	
herkez		dinazor	
ızdırab		kontür	
ıspat		tesbit	
kirbit		karnıbahar	
kiprik		yımırta	
mahsun		eşşek	
maydonoz		yourt	
laylon		eşortman	

Aşağıdaki bazı sözcüklerde yazım yanlış vardır. Yanlış yazılan sözcükleri yanlış kutusuna doğru yazılan sözcükleri doğru kutusuna yazalım.

Çiçek - simid - bahar - baryam - börek - saad - anne - ayile - göz -

kopmak - silgi -çünkü - perde - kiprik - fakat -torpak süt - tren - makas -

gaste - yaprak - sinema - tiyatro - şarz - pilan - dögüş - bağzı - palyanço

### DOĞRU KUTUSU

1.....

2.....

3.....

4.....

5.....

6.....

7.....

8.....

9.....

10.....

12.....

13.....

14.....

### YANLIŞ KUTUSU

1.....

2.....

3.....

4.....

5.....

6.....

7.....

8.....

9.....

10.....

12.....

13.....

14.....